

## Mathematics Assignment


Session:2025-26

Class-I

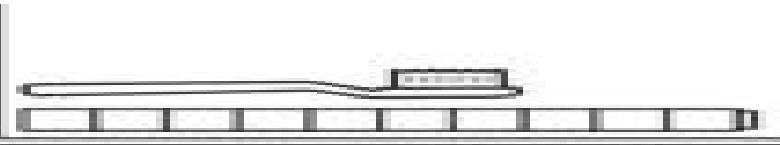
**Q1. Circle the largest number.**

24    12    49    36

**Q2. Write the length of each of the objects.**



Ladder is \_\_\_\_\_ cubes long.



Toothbrush is \_\_\_\_\_ cubes long.

**Q3. Complete the pattern.**



a.

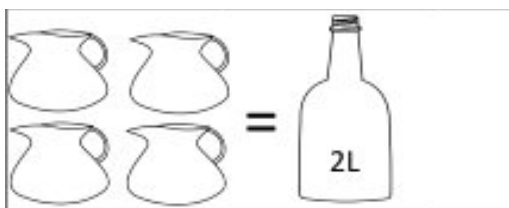
\_\_\_\_\_



b.

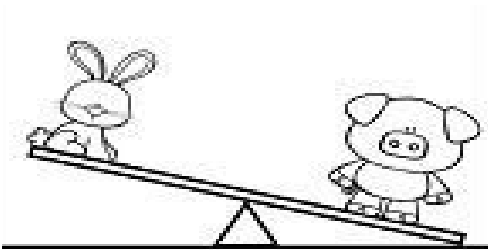
\_\_\_\_\_

**Q4. Fill in the blanks with correct answer.**



a.

Capacity of jar is \_\_\_\_\_ cups.



b. \_\_\_\_\_ is heavier than rabbit.

**Q5. Write which object can roll or slide.**



**Q6. Circle the smallest number.**

25    89    19    76

**Q7. Write the number names.**

a. 65 \_\_\_\_\_

b. 89 \_\_\_\_\_

c. 46 \_\_\_\_\_

**Q8. Solve the following.**

a.

T	O
3	3
+1	5
<hr/>	

b.

T	O
4	9
-2	4
<hr/>	

c.

T	O
3	7
-2	2
<hr/>	

d.

T	O
2	2
+2	7
<hr/>	

**Q9. Mohan has 25 marbles in the box and he got 23 more from his mother. How many marbles does he have now?**

**T     O**

He has \_\_\_\_\_ marbles now

\_\_\_\_\_  
\_\_\_\_\_

**Q10. Riya has 47 balls. She gave 35 to his sister. How many balls does she have now?**

**T     O**

She has \_\_\_\_\_ balls now

\_\_\_\_\_  
\_\_\_\_\_

**Q11. Solve**

- a.  $20 + 42 =$  \_\_\_\_\_
- b.  $85 - 22 =$  \_\_\_\_\_
- c.  $70 + 10 =$  \_\_\_\_\_
- d.  $64 - 20 =$  \_\_\_\_\_

**Q12. Solve**

- a. 4 tens + 2 tens = \_\_\_\_\_
- b. 9 tens – 5 tens = \_\_\_\_\_
- c. 6 tens + 1 tens = \_\_\_\_\_
- d. 8 tens – 4 tens = \_\_\_\_\_

**Q13. Arrange in increasing order.**

**52 ,   87 ,   65 ,   77**

\_\_\_\_\_

**Q14. Arrange in decreasing order.**

**44 ,   88 ,   22 ,   66**

\_\_\_\_\_